

Find each angle measure to the nearest degree.

1)  $\tan A = 2.0503$

2)  $\cos Z = 0.1219$

3)  $\tan Y = 0.6494$

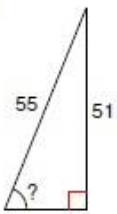
4)  $\sin U = 0.8746$

5)  $\cos V = 0.6820$

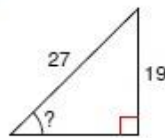
6)  $\sin C = 0.2756$

Find the measure of the indicated angle to the nearest degree.

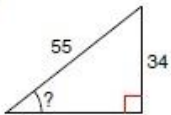
7)



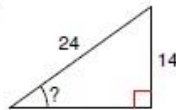
8)



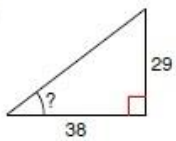
9)



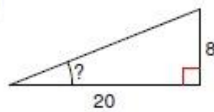
10)



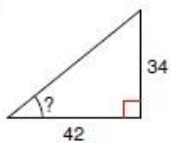
11)



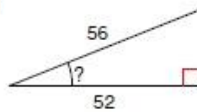
12)



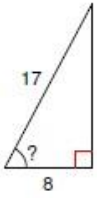
13)



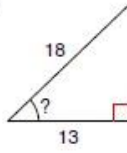
14)



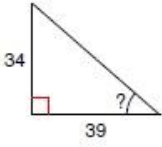
15)



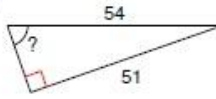
16)



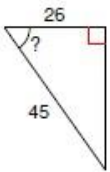
17)



18)



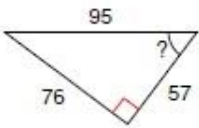
19)



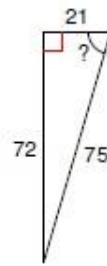
20)



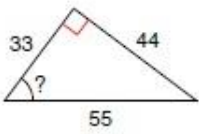
21)



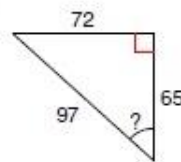
22)



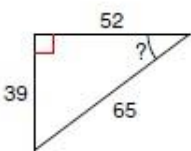
23)



24)



25)



26)

